



# RIVA

## KIDS MENU

### PASTA

SPAGHETTI BOLOGNESE.....	£4.95
SPAGHETTI CARBONARA .....	£4.95
MAC 'N' CHEESE.....	£4.95

### PIZZA

HAWAIIAN PIZZA.....	£4.95
PEPPERONI PIZZA .....	£4.95
MARGHERITA PIZZA .....	£4.96
VEGETARIAN PIZZA.....	£4.95

### CHICKEN


CHICKEN NUGGETS AND CHIPS.....	£4.95
--------------------------------	-------

### DRINKS

APPLE AND BLACKCURRANT FRUIT SHOOT .....	£1.50
FRUIT JUICE: APPLE, ORANGE & PINEAPPLE .....	£1.50

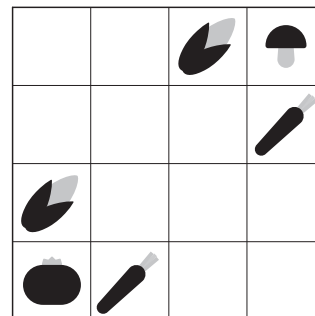
### DESSERTS

ICE CREAM: CHOCOLATE, STRAWBERRY OR VANILLA.....	£2.50
STICKY TOFFE PUDDING AND ICE CREAM.....	£3.50




Arithmetic problems:

- Top row:  $2 - \square = 2$
- Below that:  $+$  (two places)
- Below that:  $5$  (left),  $6$  (middle),  $8$  (right)
- Below that:  $4 + \square = 9$
- Below that:  $3$  (left),  $3$  (middle),  $+$  (right),  $= 4$  (far right)
- Below that:  $=$  (left)
- Below that:  $\square - 7 = \square$
- Below that:  $9 - \square = \square$
- Below that:  $-$  (middle),  $+$  (right),  $=$  (far right)
- Below that:  $2$  (middle)
- Below that:  $9 - \square = 3$
- Below that:  $-$  (left)
- Below that:  $=$  (left)
- Below that:  $5 + \square = 8$
- Below that:  $-$  (middle)
- Below that:  $4$  (middle)
- Below that:  $=$  (middle)
- Below that:  $\square$  (middle)
- Bottom row:  $= 0$





### SUDOKU

Fill in the grid with Images so that each column, row, and  $3 \times 3$  section contain the 4 different images




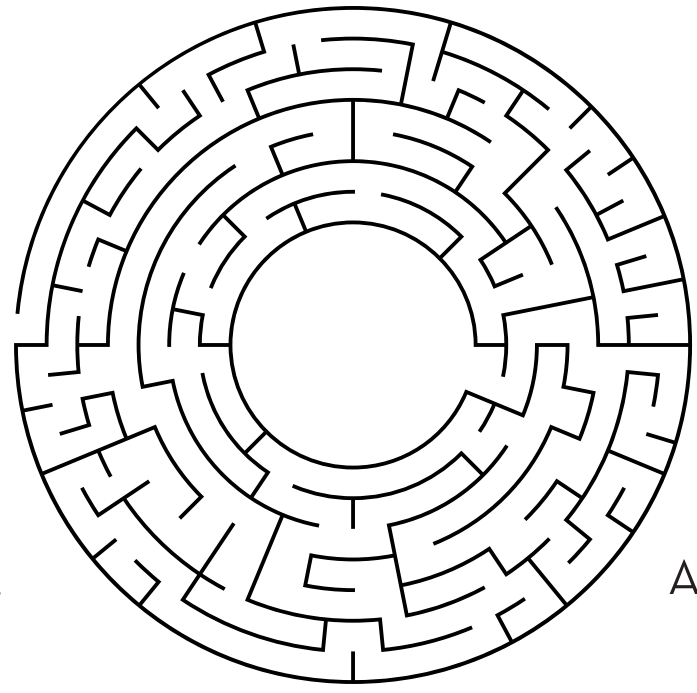
# SPOT THE 6 DIFFERENCES



DOT TO DOT FRUIT



## ANIMAL CROSSWORD



A-MAZING MAZES